



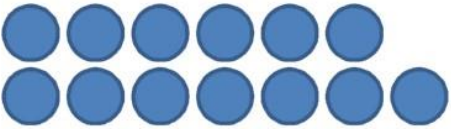






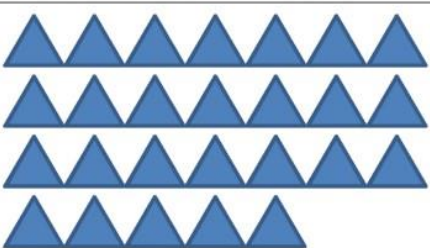
PURUSHOTTAM BHAGCHANDKA ACADEMIC SCHOOL

MATHS WORKSHEET 2

CLASS : K.G.

NAME:.....

Count the number of objects in each picture.

1)  How many? _____	2)  How many? _____
3)  How many? _____	4)  How many? _____
5)  How many? _____	6)  How many? _____
7)  How many? _____	8)  How many? _____













PURUSHOTTAM BHAGCHANDKA ACADEMIC SCHOOL

MATHS WORKSHEET 3

CLASS : K.G.

NAME:.....

Fill in the missing letters to spell the numbers shown:

 __NE	 TW__	 THR__E	 FO__R
 F__VE	 S__X	 S__VEN	
 E__GHT	 NIN__	 T__N	



Write the names of the numbers in the boxes:

11

12

13

14

15

16

17

18

19

twenty twelve
eighteen eleven
nineteen fourteen
thirteen seventeen
sixteen fifteen

20